

MUST DO 100 QUESTIONS

FOR

ATDB.uno
Class 12th

BOARDS 2024

The partial pressure of ethane over a saturated solution containing 6.56×10^{-2} g of ethane is 1 bar. If the solution were to contain 5.0×10^{-2} g of ethane, then what will be the partial pressure of the gas ? [CBSE Comptt. Delhi 2013]

ATDB.uno

positive deviation ?

OR

Define azeotropes. What type of azeotrope is formed by positive deviation from Raoult's law ? Give an example. [CBSE Delhi 2015]

ATDB.uno

A Q. 6. (i) Gas (A) is more soluble in water than Gas (B) at the same temperature. Which one of the two gases will have the higher value of K_H (Henry's constant) and why ?

(ii) In non-ideal solution, what type of deviation shows the formation of maximum boiling azeotropes ?

[CBSE OD 2016]

ATDB.uno

R + A Q. 1. (a) 30 g of urea ($M = 60 \text{ g mol}^{-1}$) is dissolved in 846 g of water. Calculate the vapour pressure of water for this solution if vapour pressure of pure water at 298 K is 23.8 mm Hg.

(b) Write two differences between ideal solutions and non-ideal solutions. [CBSE OD Set-1, 2, 3 2017]

ATDB.uno

A 1.00 molal aqueous solution of trichloroacetic acid (CCl_3COOH) is heated to its boiling point. The solution has the boiling point of 100.18°C . Determine the van't Hoff factor for trichloroacetic acid. (K_b for water = $0.512\text{ K kg mol}^{-1}$).

ATDB.uno

Which of the following solutions has higher freezing point?

0.05 M $\text{Al}_2(\text{SO}_4)_3$, 0.1 M $\text{K}_3[\text{Fe}(\text{CN})_6]$ Justify.

ATDB.uno

Calculate the mass of compound (molar mass = 256 g mol^{-1}) to be dissolved in 75 g of benzene to lower its freezing point by 0.48 K ($K_f = 5.12 \text{ K kg mol}^{-1}$). [CBSE Delhi 2014]

ATDB.uno

A 10% solution (by mass) of sucrose in water has freezing point of 269.15 K. Calculate the freezing point of 10% glucose in water, if freezing point of pure water is 273.15 K.

**Given : (molar mass of sucrose = 342 g mol⁻¹)
(molar mass of glucose = 180 g mol⁻¹)**

ATDB.uno

5.7 g of benzoic acid dissolved in 47 g of benzene shows a depression in freezing point of 1.02 K. Calculate the Van't Hoff factor and predict the nature of solute (associated or dissociated).

(Given : Molar mass of benzoic acid = 122 g mol^{-1} , K_f for benzene = $4.9 \text{ K kg mol}^{-1}$) [CBSE Delhi 2015]

ATDB.uno

A solution containing 15 g urea (molar mass = 60 g mol⁻¹) per litre of solution in water has the same osmotic pressure (isotonic) as a solution of glucose (molar mass = 180 g mol⁻¹) in water. Calculate the mass of glucose present in one litre of its solution.

ATDB.uno

(1) The vapour pressure of benzene and toluene at 293 K are 75 mm Hg and 22 mm Hg respectively. 23.4 g of benzene and 64.4 g of toluene are mixed. If the two form an ideal solution, calculate the mole fraction of benzene in the vapour phase assuming that the vapour pressures are in equilibrium with the liquid mixture at this temperature.

ATDB.uno

Henry's law constant for CO_2 in water is 1.67×10^9 Pa at 298 K. Calculate the number of moles of CO_2 in 500 ml of soda water when packed under 2.53×10^5 Pa at the same temperature.

ATDB.uno

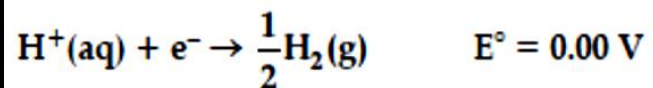
State the law of independent migration of ions. Why does the conductivity of a solution decrease with dilution ? [CBSE OD 2014]

ATDB.uno

Calculate the degree of dissociation (α) of acetic acid at its normal concentration (c_m) at 25°C. Given $\lambda^\circ(\text{H}^+) = 349.6 \text{ S cm}^2 \text{ mol}^{-1}$ and $\lambda^\circ(\text{CH}_3\text{COO}^-) = 40.9 \text{ S cm}^2 \text{ mol}^{-1}$. [CBSE Delhi Set-1, 2, 3 2017]

ATDB.uno

Q. 5. (i) Following reactions occur at cathode during the electrolysis of aqueous silver chloride solution.



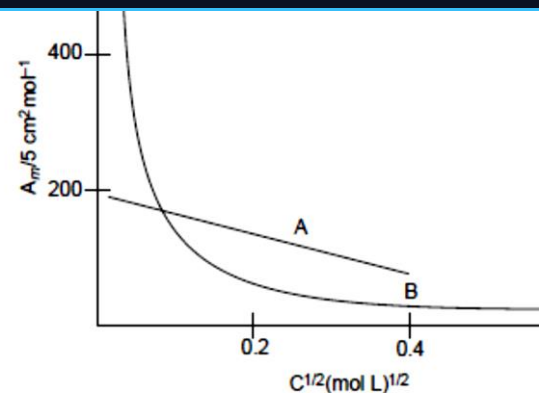
On the basis of their standard reduction electrode potential (E°) values, which reaction is feasible at the cathode and why?

Define limiting molar conductivity. Why conductivity of an electrolyte solution decreases with the decrease in concentration? [CBSE Delhi 2015]

ATDB.uno

conductivity of the electrolyte A on dilution ?

(ii) As seen from the graph, the value of limiting molar conductivity (Λ_m°) for electrolyte B cannot be obtained graphically. How can this value be obtained ?
[CBSE SQP 2016]



ATDB.uno

Conductivity of 2.5×10^{-5} M methanoic acid is $5.25 \times 10^{-5} \text{ S cm}^{-1}$.

Calculate its molar conductivity and degree of dissociation.

Given: $\lambda^{\circ}(\text{H}^{+}) = 349.5 \text{ S cm}^2 \text{ mol}^{-1}$ and $\lambda^{\circ}(\text{HCOO}^{-}) = 50.5 \text{ S cm}^2 \text{ mol}^{-1}$. [CBSE OD 2015]

ATDB.uno

$\text{Cr(s)}/\text{Cr}^{3+} (0.1\text{M})//\text{Fe}^{2+} (0.01\text{M})/\text{Fe(s)}$

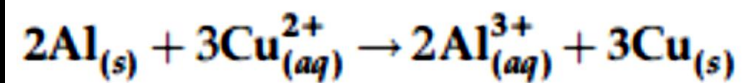
[Given: $E_{\text{cell}}^0 = + 0.30 \text{ V}$]

OR

The conductivity of 10^{-3} mol/L acetic acid at 25°C is $4.1 \times 10^{-5} \text{ S cm}^{-1}$. Calculate its degree of dissociation if Λ_m^0 for acetic acid at 25°C is $390.5 \text{ S cm}^2 \text{ mol}^{-1}$. [CBSE SQP 2017]

ATDB.uno

reaction at 298 K.

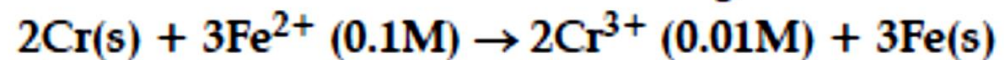


[($E^{\circ}_{\text{cell}} = 2.02 \text{ V}$), $IF = 96500 \text{ C mol}^{-1}$]

[CBSE Comptt. OD Set-3 2017]

ATDB.uno

A Q. 5. Calculate e.m.f. of the following cell at 298 K :



$$E^\circ(\text{Cr}^{3+} | \text{Cr}) = -0.74$$

$$E^\circ(\text{Fe}^{2+} | \text{Fe}) = -0.44 \text{ V.} \quad [\text{CBSE Delhi 2016}]$$

A Q. 6. Calculate the emf of the following cell at 25° C :



$$E^\circ(\text{Fe}^{2+} | \text{Fe}) = -0.44 \text{ V} \quad E^\circ(\text{H}^+ | \text{H}_2) = 0.00 \text{ V}$$

ATDB.uno

For a reaction, $A + B \rightarrow \text{Product}$, the rate law is given by $r = k [A]^{1/2} [B]^2$. What is the order of the reaction ?
[CBSE SQP 2016; DDE]

ATDB.uno

If the rate constant of a reaction is $k = 3 \times 10^{-4} \text{ s}^{-1}$, then identify the order of the reaction.

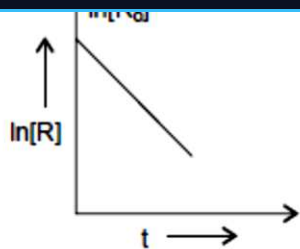
[CBSE Comptt. OD 2013]

ATDB.uno

**Write two differences between 'order of reaction'
and 'molecularity of reaction'.**

[CBSE Delhi 2014]

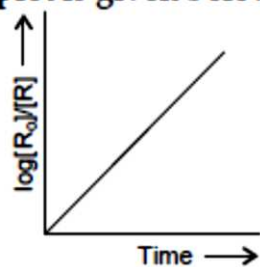
ATDB.uno



For this reaction :

- (i) Predict the order of reaction
- (ii) What is the unit of rate constant (k)?

[CBSE Comptt. Delhi Set-1, 2 2017]



For this reaction :

- (i) Predict the order of reaction
- (ii) What is the unit of rate constant (k)?

[CBSE Comptt. Delhi Set-3 2017]

ATDB.uno

A first order reaction takes 20 minutes for 25% decomposition. Calculate the time when 75% of the reaction will be completed.

ATDB.uno

Rate constant k for a first order reaction has been found to be 2.54×10^{-3} , sec^{-1} . Calculate its $3/4^{\text{th}}$ life. ($\log 4 = 0.6020$)

ATDB.uno

The following data were obtained during the first order thermal decomposition of SO_2Cl_2 at a constant volume:

Experiment	Time (s)	Total pressure (atm)
1	0	0.3
2	100	0.5

Calculate rate constant.

[Given: $\log 6 = 0.7782$; $\log 3 = 0.4771$]

ATDB.uno

Experiment No.	[A]	[B]	Initial rate of formation of D
1	0.1 M	0.1 M	$6.0 \times 10^{-3} \text{ M min}^{-1}$
2	0.3 M	0.2 M	$7.2 \times 10^{-2} \text{ M min}^{-1}$
3	0.3 M	0.4 M	$2.88 \times 10^{-1} \text{ M min}^{-1}$
4	0.4 M	0.1 M	$2.40 \times 10^{-2} \text{ M min}^{-1}$

Determine rate law and the rate constant for the reaction.

ATDB.uno

The decomposition of A into products has a value of k as $4.5 \times 10^3 \text{ s}^{-1}$ at 10° C and energy of activation 60 kJ mol^{-1} . At what temperature would k be $1.5 \times 10^{-4} \text{ s}^{-1}$? [CBSE Delhi 2013]

ATDB.uno

Q. 4. Explain the following :

- (i) The enthalpies of atomization of transition metals are quite high.**
- (ii) The transition metals and many of their compounds act as good catalysts. [CBSE Comptt. Delhi 2012]**

ATDB.uno

Assign the reason for the following :
Copper (I) ion is not known in aqueous solution.

ATDB.uno

Explain the following observation :
Most of the transition metal ions exhibit characteristic colour in aqueous solution.

ATDB.uno

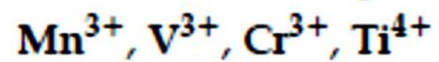
Why E° value for Mn, Ni and Zn are more negative than expected ? [NCERT Exemplar]

ATDB.uno

The transition metals and their compounds are usually paramagnetic.

The transition metals exhibit variable oxidation states. [CBSE Comptt. Delhi 2015]

ATDB.uno

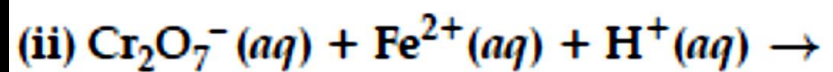
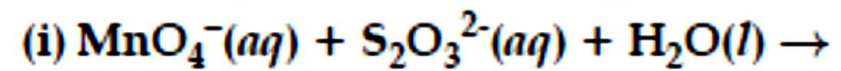


(Atomic no: Mn = 25, V = 23, Cr = 24, Ti = 22)

- (a) Which ion is most stable in an aqueous solution?
 - (b) Which ion is the strongest oxidizing agent?
 - (c) Which ion is colourless?
 - (d) Which ion has the highest number of unpaired electrons?
- [CBSE Foreign Set-1, 2, 3 2017]

ATDB.uno

Q. 3. Complete the following chemical equations :



ATDB.uno

Q. 5. Explain the following observations:

- (i) Copper atom has completely filled d orbitals ($3d^{10}$) in its ground state, yet it is regarded as a transition element.**
- (ii) Cr^{2+} is a stronger reducing agent than Fe^{2+} in aqueous solution.**

ATDB.uno

- (i) E^0 for $\text{Mn}^{3+}/\text{Mn}^{2+}$ couple is more positive than that for $\text{Fe}^{3+}/\text{Fe}^{2+}$. (At. Nos. Mn = 25, Fe = 26).
- (ii) Ce^{3+} can be easily oxidised to Ce^{4+} . (At. No. Ce = 58). [CBSE OD 2012]

ATDB.uno

Q. 10. Explain the following observation.

- (i) Silver atom has completely filled d -orbitals ($4d^{10}$) in its ground state, yet it is regarded as a transition element.
- (ii) E^0 value for $\text{Mn}^{3+}/\text{Mn}^{2+}$ couple is much more positive than $\text{Cr}^{3+}/\text{Cr}^{2+}$.

ATDB.uno

Q. 2. The magnetic moment of few transition metal ions are given below:

Metal ion	Magnetic moment (BM)
Sc ³⁺	0.00
Cr ²⁺	4.90
Ni ²⁺	2.84
Ti ³⁺	1.73

(at no. Sc = 21, Ti = 22, Cr = 24, Ni = 28)

Which of the given metal ions:

- has the maximum number of unpaired electrons?
- force colourless aqueous solution?
- exhibits the most stable +3 oxidation state?

OR

Consider the standard electrode potential values (M^{2+}/M) of the elements of the first transition series.

Ti	V	Cr	Mn	Fe
-1.63	-1.18	-0.90	-1.18	-0.44
Co	Ni	Cu	Zn	
-0.28	-0.25	+0.34	-0.76	

Explain :

- E^0 value for copper is positive.
- E^0 value of Mn is more negative as expected from the trend.

ATDB.uno

What is lanthanoid contraction ? What are its two consequences ?

ATDB.uno

- (i) Eu^{+2} is a strong reducing agent.**
- (ii) Orange colour of dichromate ion changes to yellow in alkaline medium.**
- (iii) $E^0(\text{M}^{2+}/\text{M})$ values for transition metals show irregular variation. [CBSE Foreign Set-2 2017]**

ATDB.uno

Write IUPAC name of the complex: $[\text{CoCl}_2(\text{en})_2]^+$.

Write IUPAC name of the complex $[\text{Co}(\text{NH}_3)_4\text{Cl}(\text{NO}_2)]^+$.

Which of the following is more stable complex and why ?

$[\text{Co}(\text{NH}_3)_6]^{3+}$ and $[\text{Co}(\text{en})_3]^{3+}$.

ATDB.uno

How many ions are produced from the complex, $[\text{Co}(\text{NH}_3)_6]\text{Cl}_2$ in solution ? [CBSE SQP 2016]

When a co-ordination compound $\text{CoCl}_2 \cdot 6\text{NH}_3$ is mixed with AgNO_3 , 3 moles of AgCl are precipitated per mole of the compound. Write Structural formula of the complex, IUPAC name of the complex. [CBSE OD 2016]

ATDB.uno

(1) what type of isomerism is shown by the complex $[\text{Co}(\text{NH}_3)_6][\text{Cr}(\text{CN})_6]$?

Why a solution of $[\text{Ni}(\text{H}_2\text{O})_6]^{2+}$ is green while a solution of $[\text{Ni}(\text{CN})_4]^{2-}$ is colourless? (At. No. of Ni = 28) [KVS]

Write the IUPAC name of the following complex: $[\text{Co}(\text{NH}_3)_5(\text{CO}_3)\text{Cl}]$.

ATDB.uno

(1) What type of isomerism is shown by the complex $[\text{Co}(\text{en})_3]\text{Cl}_3$?

Write the hybridization and magnetic character of $[\text{Co}(\text{C}_2\text{O}_4)_3]^{2-}$. (At. no. of Co = 27)

Write IUPAC name of the following Complex $[\text{Cr}(\text{NH}_3)_3\text{Cl}_3]$ [CBSE Delhi Set-3 2017]

ATDB.uno

Write the hybridization, shape and magnetic character of $[\text{Fe}(\text{CN})_6]^{4-}$.

For the complex ion $[\text{CoF}_6]^{3-}$ write the hybridization type, magnetic character and spin nature. [Atomic number: Co = 27]

ATDB.uno

complex compounds.

(b) The lowest oxide of transition metal is basic whereas the highest oxide is amphoteric or acidic.

(c) E^0 value for the Mn^{3+}/Mn^{2+} couple is highly positive (+1.57 V) as compare to Cr^{3+}/Cr^{2+} .

(ii) Write one similarity and one difference between the chemistry of lanthanoid and actinoid elements.

OR

(i) (a) How is the variability in oxidation states of transition metals different from that of the *p*-block elements?

(b) Out of Cu^+ and Cu^{2+} , which ion is unstable in aqueous solution and why?

(c) Orange colour of $Cr_2O_7^{2-}$ ion changes to yellow when treated with an alkali. Why?

(ii) Chemistry of actinoids is complicated as compared to lanthanoids. Give two reasons.

[CBSE Delhi Set-1, 2, 3 2017]

ATDB.uno

ATDB.uno

State reason for each of the following :
CO is stronger complexing reagent than NH₃.
The molecular shape of Ni(CO)₄ is not the same as that of [Ni(CN)₄]²⁻.

ATDB.uno

Explain why $[\text{Co}(\text{NH}_3)_6]^{3+}$ is an inner complex whereas $[\text{Ni}(\text{NH}_3)_6]^{2+}$ is an outer orbital complex. (At. no. Co = 27, Ni = 28)

ATDB.uno

(1) Draw the geometrical isomers of complex $[\text{Pt}(\text{NH}_3)_2\text{Cl}_2]$.

On the basis of crystal field theory, write the electronic configuration for d^4 ion if $\Delta_o < P$.

Write the hybridization and magnetic behaviour of the complex $[\text{Ni}(\text{CO})_4]$. (At. no. of Ni = 28)

ATDB.uno

A coordination compound with molecular formula $\text{CrCl}_3 \cdot 4\text{H}_2\text{O}$ precipitates one mole of AgCl with AgNO_3 solution. Its molar conductivity is found to be equivalent to two ions. What is the structural formula and name of the compound?

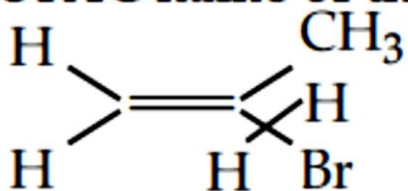
ATDB.uno

A metal ion M^{n+} having d^n valence electronic configuration combines with three bidentate ligands to form a complex compound. Assuming $\Delta_o > P$.

ATDB.uno

Write the structure of 1-bromo-4-chlorobut-2-ene.
[CBSE Delhi Set-1 2017]

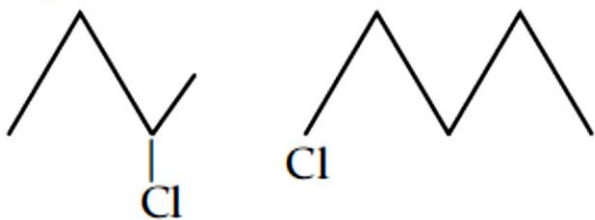
Write the IUPAC name of the following :



ATDB.uno

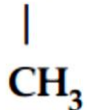
Write the structure of 2,4-dinitrochlorobenzene.

[CBSE Delhi Set-2 2017]

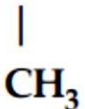


ATDB.uno

Out of $\text{CH}_3 - \text{CH} - \text{CH}_2 - \text{Cl}$ and



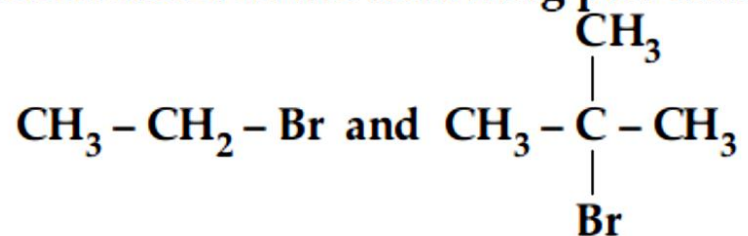
$\text{CH}_3 - \text{CH}_2 - \text{CH} - \text{Cl}$, which is more reactive



towards $\text{S}_{\text{N}}1$ reaction and why ?

ATDB.uno

Which would undergo $\text{S}_{\text{N}}2$ reaction faster in the following pair and why ?



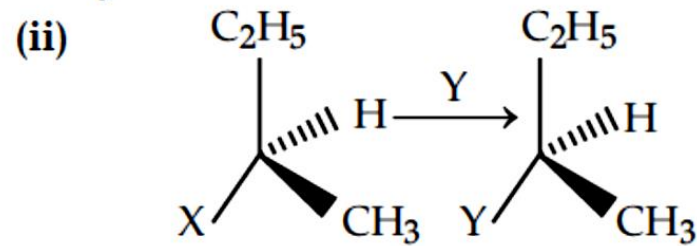
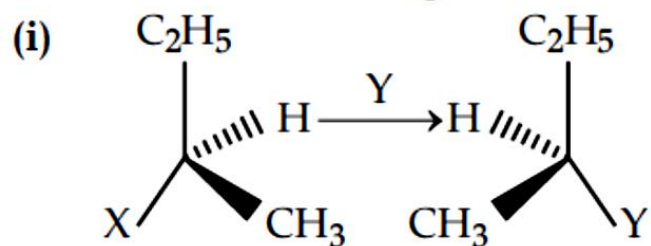
formula C_5H_{12} , identify the one that on photochemical chlorination yields a single monochloride. [CBSE SQP 2016]

ATDB.uno

How can methyl bromide be preferentially converted to methyl isocyanide ?

ATDB.uno

Which of the following two reactions is S_N2 and why?



ATDB.uno

- (i) The C—Cl bond length in chlorobenzene is shorter than that in $\text{CH}_3\text{—Cl}$.
- (ii) Chloroform is stored in closed dark brown bottles.

ATDB.uno

Chlorobenzene is extremely less reactive towards a nucleophilic substitution reaction. Give two reasons for the same.

ATDB.uno

Give reasons :

C–Cl bond length in chlorobenzene is shorter than C–Cl bond length in CH₃–Cl.

The dipole moment of chlorobenzene is lower than that of cyclohexyl chloride.

S_N¹ reactions are accompanied by racemization in optically active alkyl halides.

ATDB.uno

2. Following compounds are given to you :

**2-Bromopentane, 2-Bromo-2-methylbutane,
1-Bromopentane**

- (i) Write the compound which is most reactive towards S_N2 reaction.**
- (ii) Write the compound which is optically active.**
- (iii) Write the compound which is most reactive towards β -elimination reaction.**

[CBSE Delhi/OD, Set-1, 2, 3 2017]

ATDB.uno

What happens when :

$\text{CH}_3\text{-Cl}$ is treated with aqueous KOH ?

$\text{CH}_3\text{-Cl}$ is treated with KCN ?

**$\text{CH}_3\text{-Br}$ is treated with Mg in the presence of
dry ether ? [CBSE Delhi 2016]**

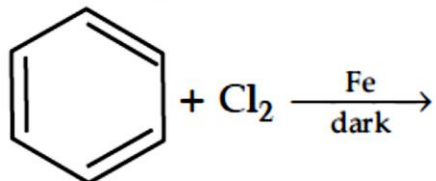
ATDB.uno

5. Give the IUPAC name of the product formed when :

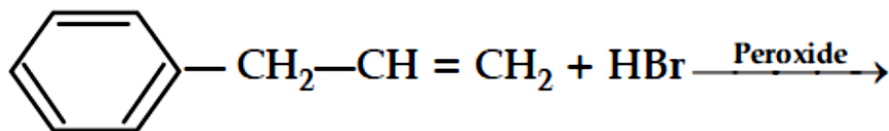
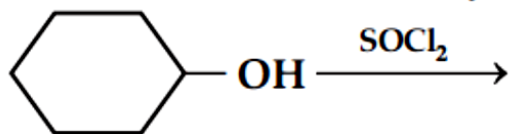
- (i) 2-Methyl-1-bromopropane is treated with sodium in the presence of dry ether.
- (ii) 1-Methyl cyclohexene is treated with Hl .
- (iii) Chloroethane is treated with silver nitrite.

ATDB.uno

Draw the structure of major monohalo product in the following reaction :



Draw the structure of major monohalo product in each of the following reactions :



How will you carry out the following conversion :

(i) 2-Bromopropane to 1-bromopropane

(ii) Benzene to p-chloronitrobenzene

[CBSE Comptt. OD Set-1, 2, 3 2017]

ATDB.uno

Although chlorine is an electron withdrawing group, yet it is *ortho-*, *para*-directing in electrophilic aromatic substitution reactions. Explain why it is so ? [CBSE Delhi 2012]

ATDB.uno

What happens when

Chlorobenzene is treated with $\text{Cl}_2/\text{FeCl}_3$,

Ethyl chloride is treated with AgNO_2 ,

2-bromopentane is treated with alcoholic KOH ?

Write the chemical equations in support of your answer.

ATDB.uno

10. Give reasons :

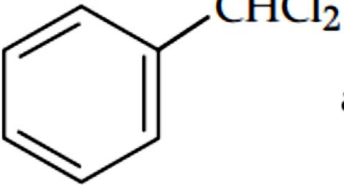
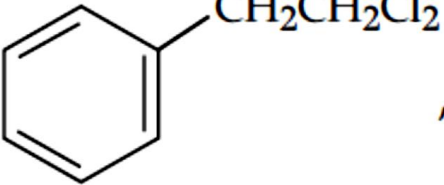
n-Butyl bromide has higher boiling point than t-butyl bromide.

Racemic mixture is optically active.

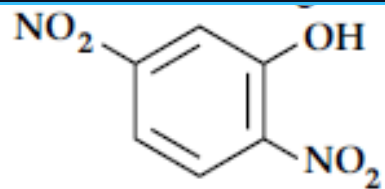
The presence of nitro group ($-\text{NO}_2$) at O/P positions increases the reactivity of haloarenes towards nucleophilic substitution reactions.

[CBSE Delhi 2015]

ATDB.uno

Out of  and ,
which is an example of benzylic halide?

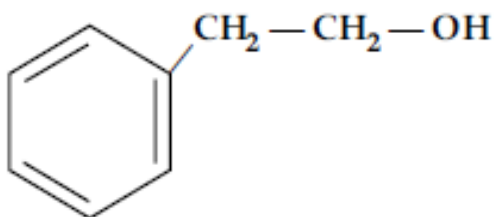
ATDB.uno



[CBSE Delhi 2015]

Write the IUPAC name of the given compound :

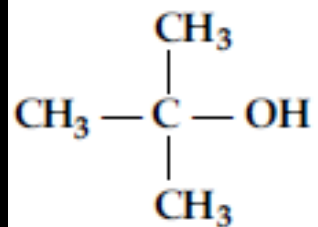
1



[CBSE OD 2016]

ATDB.uno

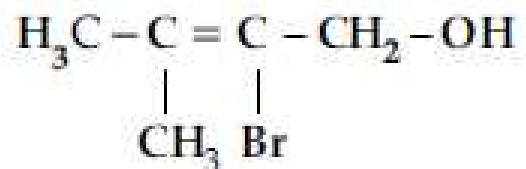
Write the IUPAC name of the following :



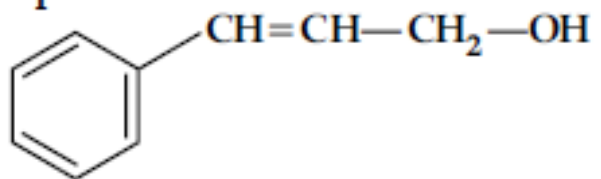
[CBSE Comptt. OD 2012]

ATDB.uno

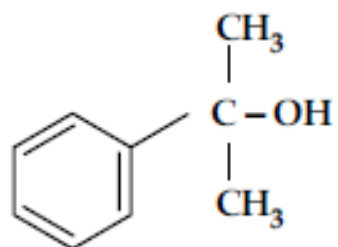
Write the IUPAC name of the following compound :



Write the IUPAC name of the following compound:



Write the IUPAC name of the following compound :



[CBSE Foreign Set-3 2017]

ATDB.uno

Draw the structure of hex-1-en-5-ol compound.

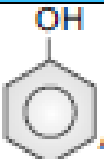
[CBSE Delhi 2012]

ATDB.uno

Which of the following isomers is more volatile :

o-nitrophenol or *p*-nitrophenol ?

[CBSE Delhi 2014]

Out of CH_3OH and , which one is more acidic ?

[CBSE Comptt. Delhi 2016]

ATDB.uno

Write the chemical reaction to explain Kolbe's reaction.
[CBSE Comptt. Delhi 2013]

ATDB.uno

Give a chemical test to distinguish between
2-Pentanol and 3-Pentanol.

[CBSE Comptt. Delhi 2013]

ATDB.uno

What happens when phenol is oxidized by $\text{Na}_2\text{Cr}_2\text{O}_7 / \text{H}_2\text{SO}_4$?

[CBSE Comptt. OD Set-1 2017]

ATDB.uno

Q. 1. (i) Predict the major product of acid catalysed dehydration of 1-Methylcyclohexanol.

(ii) You are given benzene, conc. H_2SO_4 , NaOH and dil.HCl. Write the preparation of phenol using these reagents.

ATDB.uno

Q. 2. Write the equations involved in the following reactions :

(i) Reimer-Tiemann reaction

(ii) Williamson synthesis

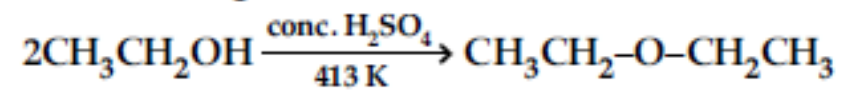
CBSE 2014

ATDB.uno

o-nitro phenol is more acidic than o-methoxy phenol. Explain why. [CBSE Comptt. OD 2013]

ATDB.uno

Write the mechanism of the following reaction :



[CBSE Delhi 2016]

ATDB.uno

- (i) Phenols are more soluble in water than the hydrocarbons of comparable molecular masses.
- (ii) ortho-nitrophenol is more acidic than ortho-methoxyphenol. [CBSE OD 2012]

ATDB.uno

Write the structures of the products when Butan-2-ol reacts with the following



ATDB.uno

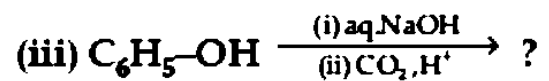
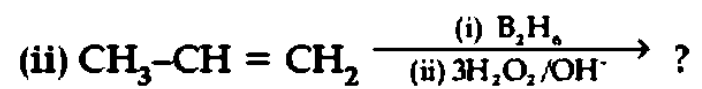
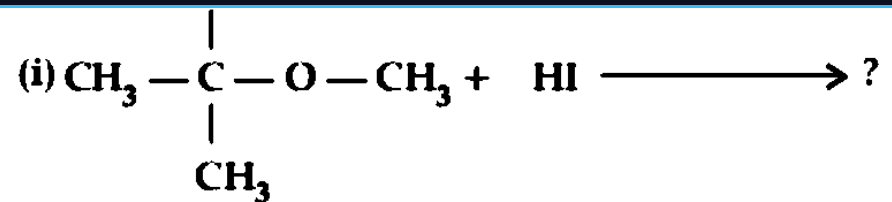
How do you convert:

(i) Phenol to toluene

[CBSE OD Set-2 2016]

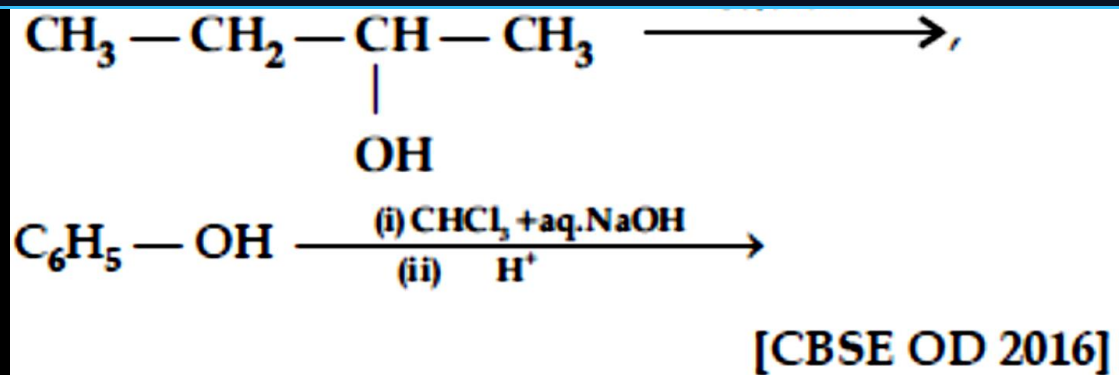
(ii) Formaldehyde to Ethanol

ATDB.uno



[CBSE Delhi 2016]

ATDB.uno



ATDB.uno

(ii) Ethyl magnesium chloride to Propan-1-ol [CBSE Comptt. Delhi 2015]
(iii) Propene to Propan-2-ol

ATDB.uno

**(CH₃)₃C-OH is treated with Cu at 573 K,
Anisole is treated with CH₃Cl/anhydrous AlCl₃,
Phenol is treated with Zn dust?
Write chemical equation in support of your
answer. [CBSE Foreign Set-1, 2, 3 2017]**

ATDB.uno

- (i) Alcohols are more soluble in water than the hydrocarbons of comparable molecular masses.**
- (ii) Ortho-nitrophenol is more acidic than ortho-methoxyphenol.**
- (iii) Cumene is a better starting material for the preparation of phenol. [SQP 2017]**

ATDB.uno

(a) Bromination of phenol to 2,4,6-tribromophenol

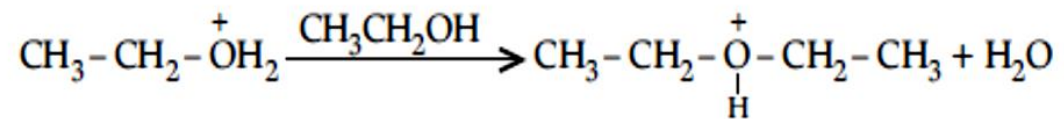
(b) Hydroboration of propene and then oxidation to propanol.

(ii) Arrange the following compound groups in the increasing order of their property indicated:

(a) p-nitrophenol, ethanol, phenol (acidic character)

(b) Propanol, Propane, Propanal (boiling point)

(iii) Write the mechanism (using curved arrow notation) of the following reaction:



[CBSE Delhi Set-1,2,3 2017]

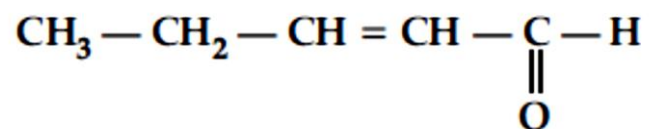
ATDB.uno

Write the IUPAC name of the following :



Write the structure of 4-chloropentan-2-one.

Write the IUPAC name of :



ATDB.uno

Arrange the following compounds in an increasing order of their reactivity in nucleophilic addition reactions :
ethanal, propanal, propanone, butanone. [CBSE Delhi 2012]

$(\text{CH}_3)_3\text{C}-\text{CHO}$ does not undergo aldol condensation. Comment [CBSE SQP 2017]

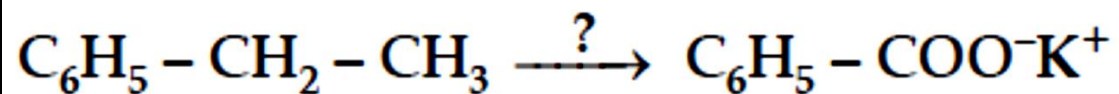
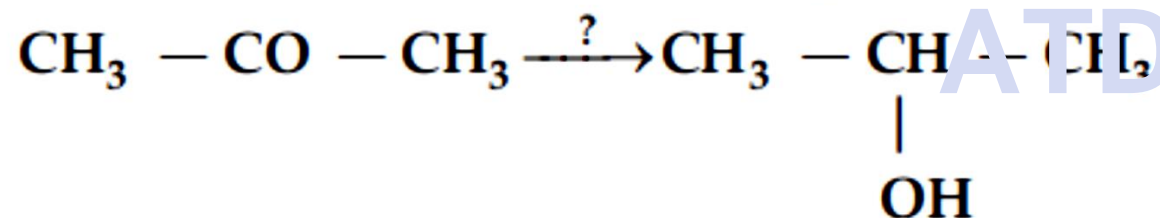
. Give the chemical test to distinguish between the following pairs of compounds.
Propanal and propanone.
Benzaldehyde and Benzoic acid.

ATDB.uno

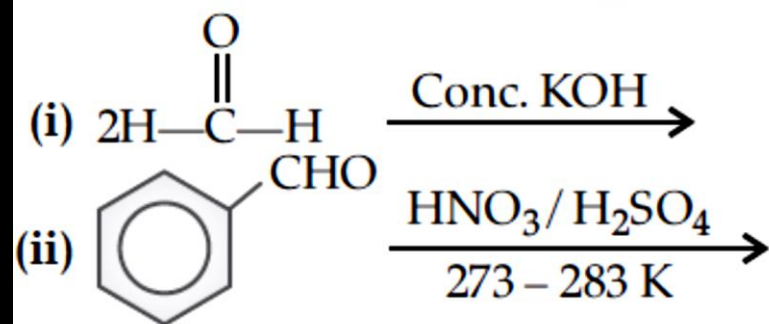
Out of $\text{CH}_3\text{CH}_2\text{COCH}_2\text{CH}_3$ and $\text{CH}_3\text{CH}_2\text{CH}_2\text{COCH}_3$ which gives iodoform test.

Name the reagents used in the following reactions :

[CBSE Delhi 2015]



ATDB.uno



ATDB.uno

Write the reaction involved in the following

(a) Etard reaction

(b) Wolff-Kishner reduction

OR

Write the equations involved in the following reactions:

(i) Wolff-Kishner reduction

(ii) Etard reaction

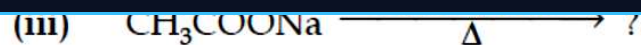
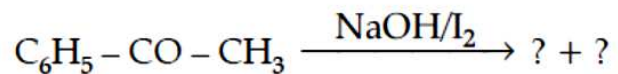
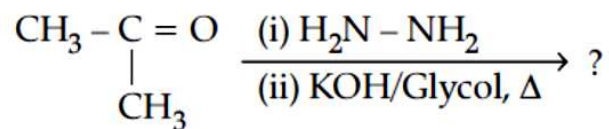
ATDB.uno

Q. 5. Give simple chemical test to distinguish between the following pairs of compounds.

(i) Ethanal and propanal

ii) Benzoic acid and phenol.

ATDB.uno

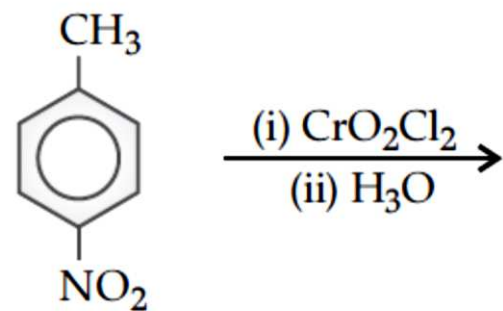
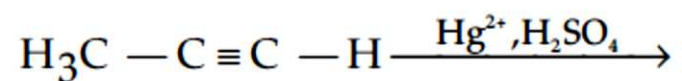
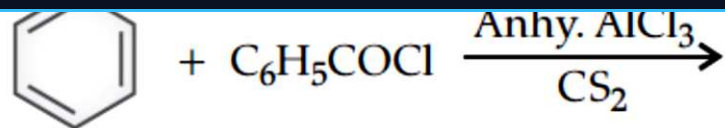


[CBSE Delhi 2015]

- Ans. (i)** $\text{CH}_3\text{CH}_2\text{CH}_3$ 1
(ii) $\text{C}_6\text{H}_5\text{COONa} + \text{CHI}_3$ $\frac{1}{2} + \frac{1}{2}$
(iii) CH_4 1

[CBSE Marking Scheme 2015]

ATDB.uno



[CBSE Delhi 2012]

ATDB.uno

How will you bring about the following conversions :

Propanone to propane

Benzoyl chloride to benzaldehyde.

Ethanal to but-2-enal.

ATDB.uno

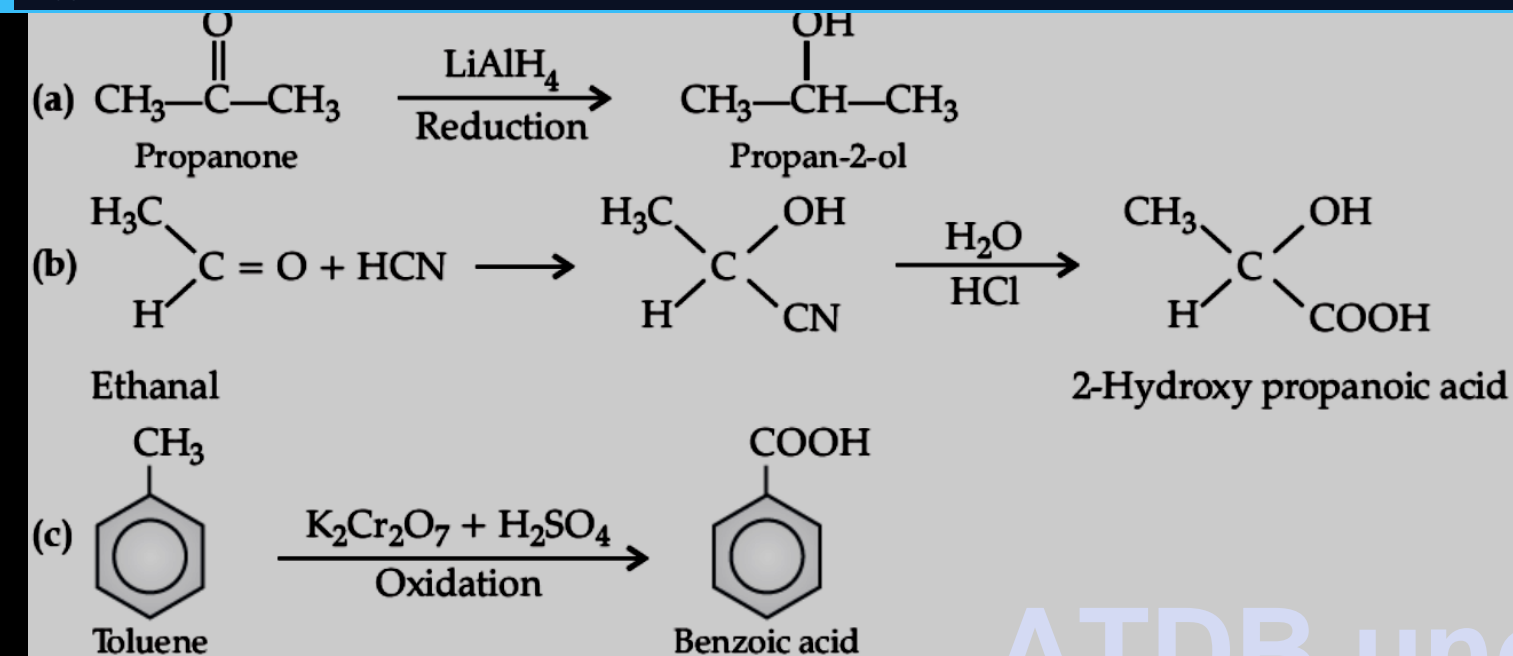
(1) How will you convert the following :

- (a) Propanone to propan-2-ol**
- (b) Ethanal to -2-hydroxy propanoic acid**
- (c) Toluene to benzoic acid**

Distinguish the following pairs of compounds :

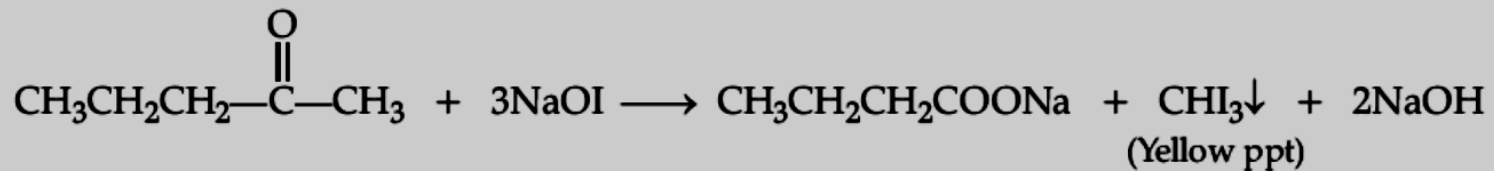
- (a) Pentan-2-one and pentan-3-one**
- (b) Ethanal and propanal**

ATDB.uno

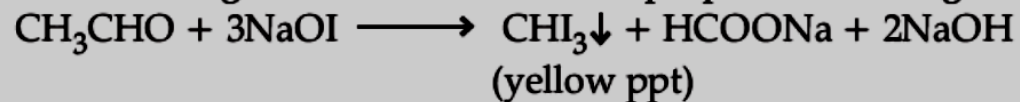


ATDB.uno

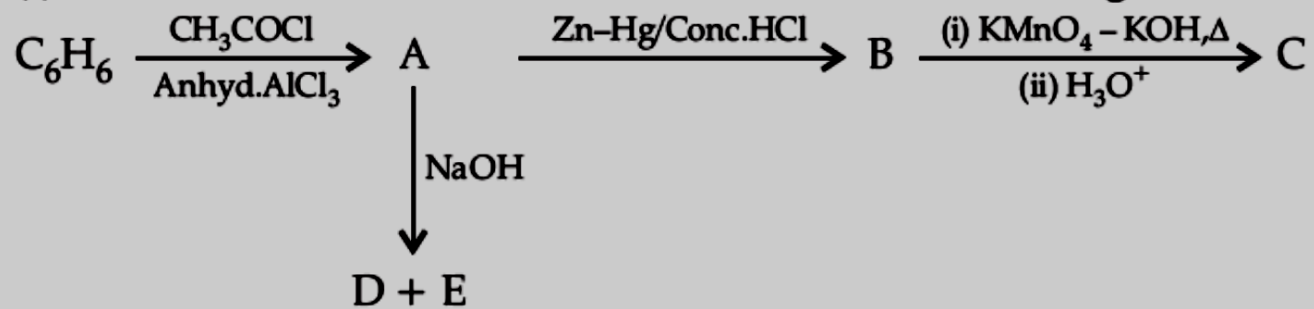
(a) Pentane -2-one gives yellow ppt of iodoform in Iodoform test, while pentane-3-one does not give it.



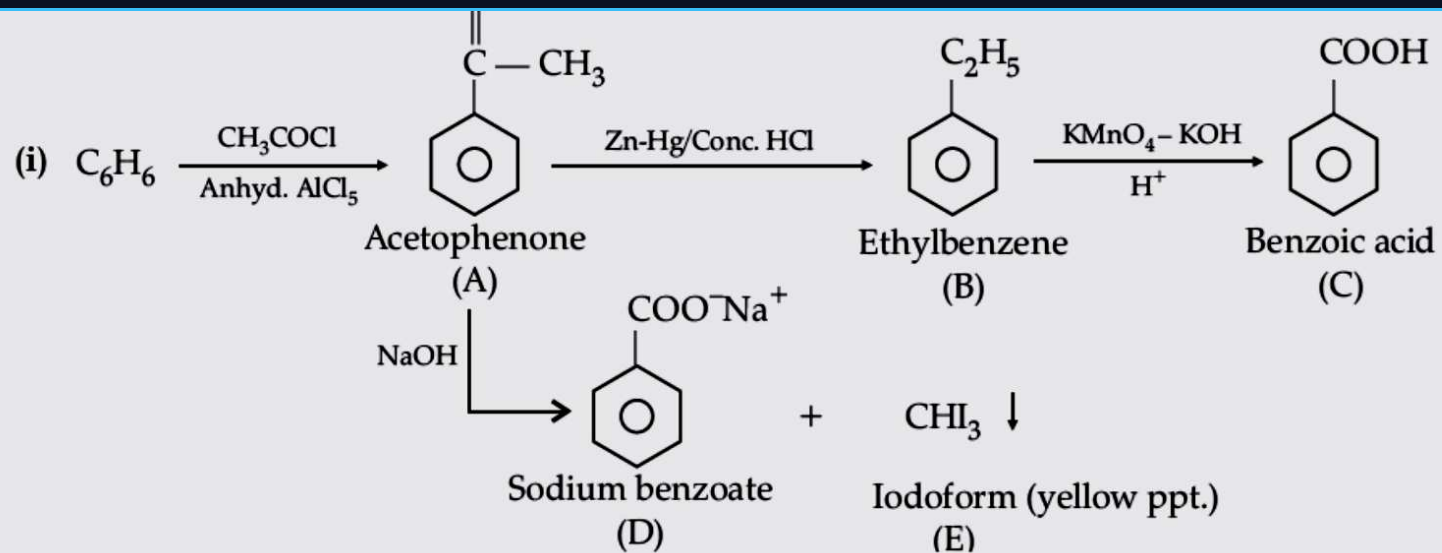
(b) Ethanal will give iodoform test, while propanal will not give it.



(1) Write the structures of A, B, C, D and E in the following reactions:



ATDB.uno



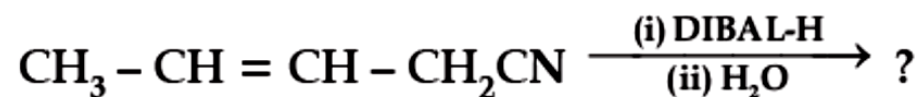
ATDB.uno

Write the chemical equation for the reaction involved in Cannizzaro reaction.

Draw the structure of the semicarbazone of ethanal.

Why pK_a of $F - CH_2 - COOH$ is lower than that of $Cl - CH_2 - COOH$?

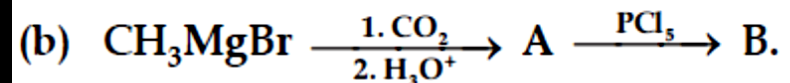
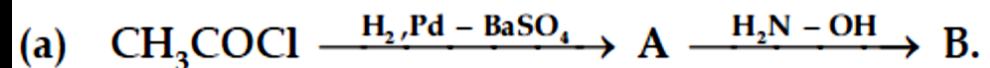
Write the product in the following reaction



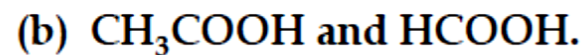
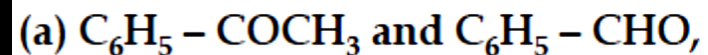
How can you distinguish between propanal and propanone ?

ATDB.uno

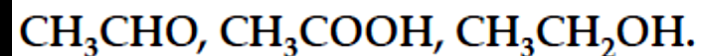
(i) Write the structures of A and B in the following reactions :



Distinguish between :



Arrange the following in the increasing order of their boiling points :



ATDB.uno

[A]
Acetaldehyde

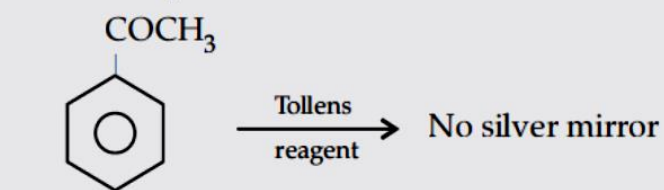
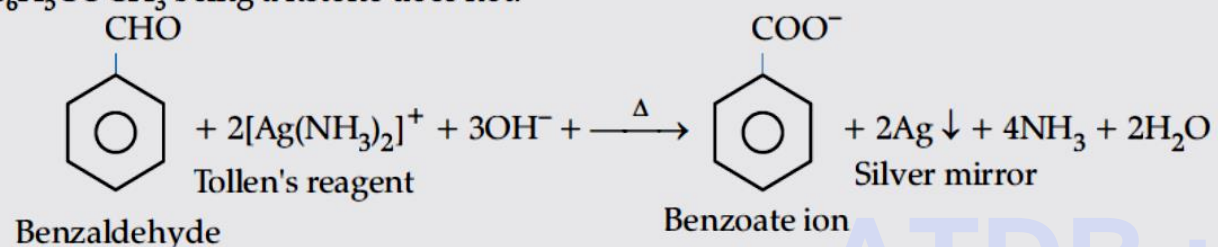
[B]
Acetaldoxime



[A]
Acetic acid


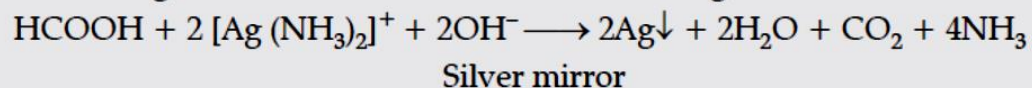
[B]
Acetyl chloride

(ii) (a) $\text{C}_6\text{H}_5 - \text{CHO}$ being an aldehyde reduces Tollen's reagent to give shining silver mirror whereas $\text{C}_6\text{H}_5\text{COCH}_3$ being a ketone does not.



1

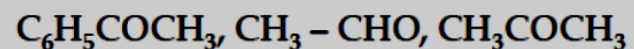
(b) HCOOH gives silver mirror test with Tollen's reagent whereas ethanoic acid does not.



$\text{CH}_3\text{CHO} < \text{CH}_3\text{CH}_2\text{OH} < \text{CH}_3\text{COOH}$

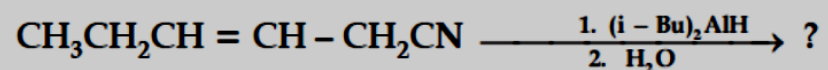
1

Arrange the following in the increasing order of their reactivity towards nucleophilic addition reaction :



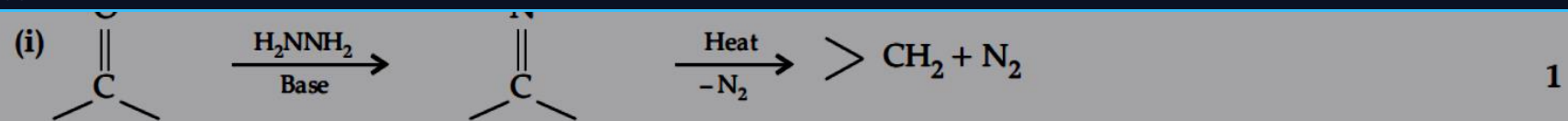
Why carboxylic acid does not give reactions of carbonyl group ?

Write the product in the following reaction

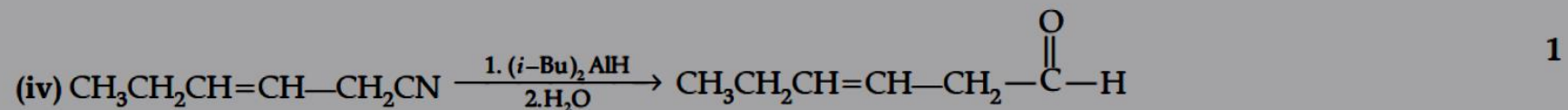
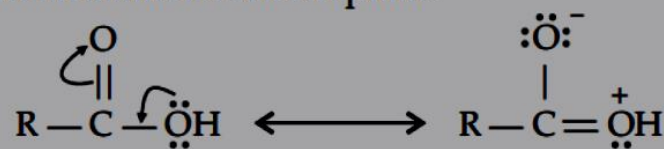


A and B are two functional isomers of compound $\text{C}_3\text{H}_6\text{O}$. On heating with NaOH and I_2 , isomer B forms yellow precipitate of iodoform whereas isomer A does not form any precipitate. Write the formulae of A and B.

ATDB.uno

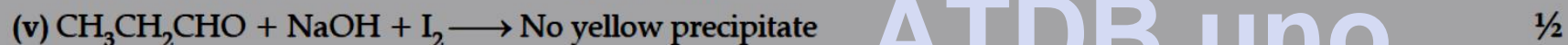


(iii) Carboxylic acids do not give reactions of carbonyl groups as it enters into resonance with lone pair O of —COOH groups thereby making the carbon atoms less electrophilic. 1



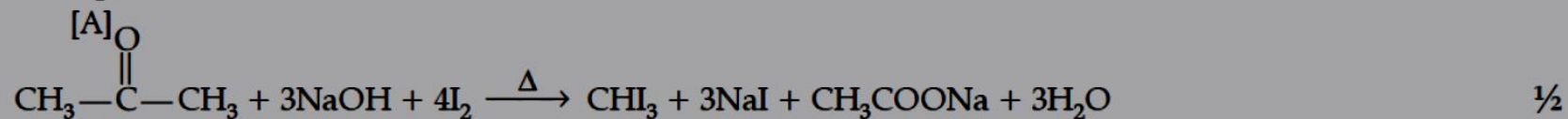
Hex-3-enitrile

Hex-3-enal



Propanal

ATDB.uno



Acetone

Yellow

[B]

precipitate

[CBSE Marking Scheme 2016]

Write the reactions involved in the following:

(i) Hell-Volhard Zelinsky reaction

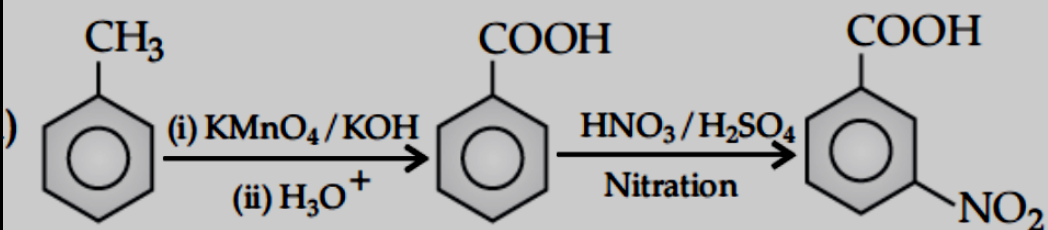
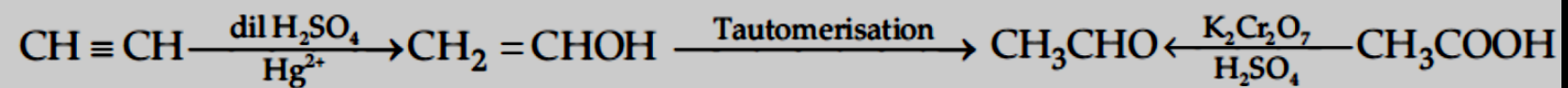
(ii) Decarboxylation reaction

ATDB.uno

How will you carry out the following conversions :

Acetylene to acetic acid

Toluene to *m*-nitro benzoic acid.



ATDB.uno

Although phenoxide ion has more number of resonating structures than carboxylate ion carboxylic acid is a stronger acid than phenol. Give two reasons. [CBSE Delhi 2013; NCERT]

ATDB.uno

[A] Q. 2. (i) Account for the following :

(a) $\text{Cl}-\text{CH}_2\text{COOH}$ is a stronger acid than CH_3COOH .

(b) Carboxylic acids do not give reactions of carbonyl group.

(ii) Write the chemical equations to illustrate the following name reactions :

(a) Rosenmund reduction.

ATDB.uno

Give reasons :

Propanone is less reactive than ethanal towards nucleophilic addition reactions.

$\text{O}_2\text{N} - \text{CH}_2 - \text{COOH}$ has lower pK_a value than CH_3COOH .

$(\text{CH}_3)_2\text{CH} - \text{CHO}$ undergoes aldol condensation whereas $(\text{CH}_3)_3\text{C} - \text{CHO}$ does not.

ATDB.uno

**Write the chemical equations involved in the following reactions :
Hoffmann-bromamide degradation reaction,
Carbylamine reaction.**

ATDB.uno

Explain the following reactions :

- (i) Gabriel phthalimide reaction**
- (ii) Coupling reaction**

ATDB.uno

Give chemical tests to distinguish between the following pairs of compounds :

(i) Aniline and Ethylamine

(ii) Ethylamine and Dimethylamine

ATDB.uno

Give reasons :

Aniline is a weaker base than cyclohexyl amine.

It is difficult to prepare pure amines by a ammonolysis of alkyl halides.

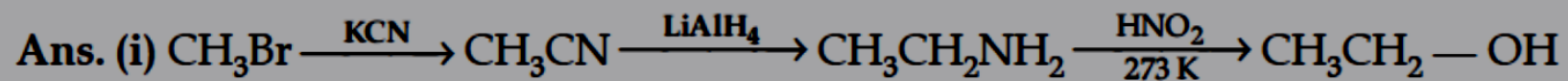
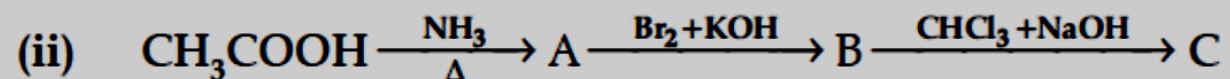
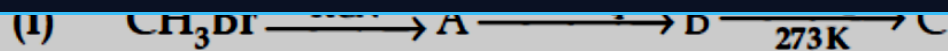
ATDB.uno

Give reasons :

Electrophilic substitution in aromatic amines takes place more readily than benzene.

CH_3CONH_2 is a weaker base than $\text{CH}_3\text{CH}_2\text{NH}_2$.

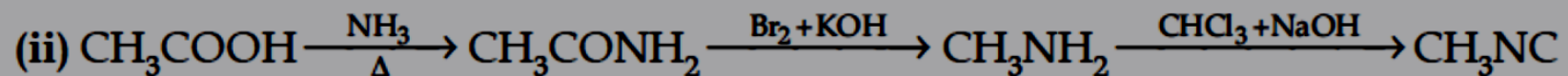
ATDB.uno



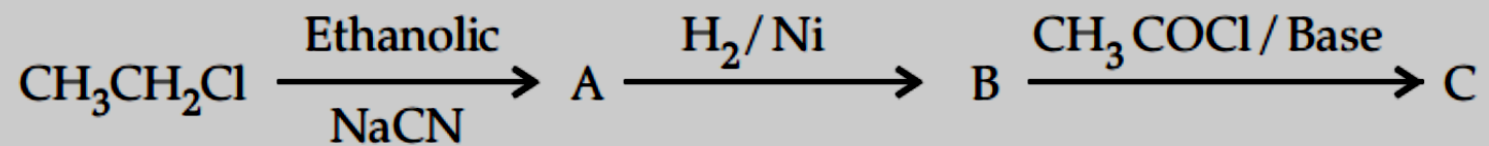
(A)

(B)

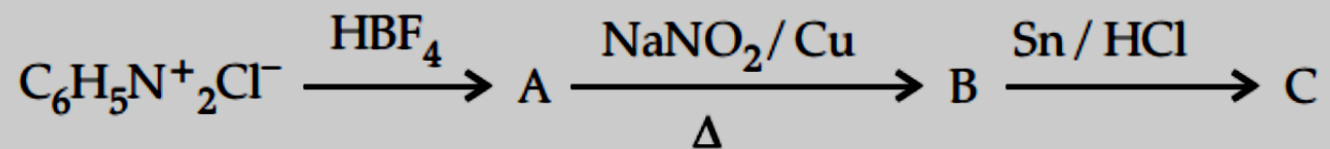
(C)



ATDB.uno



(ii)

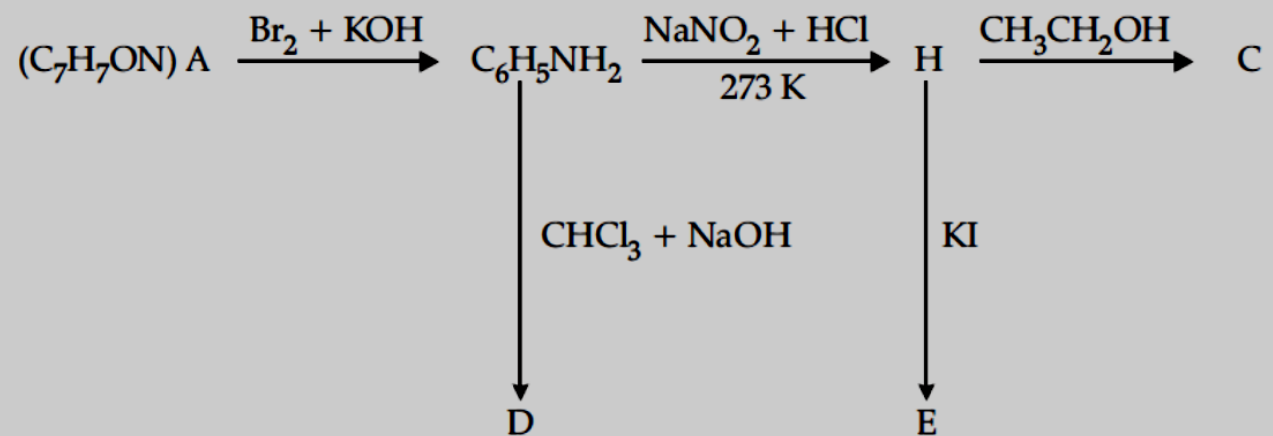


ATDB.uno

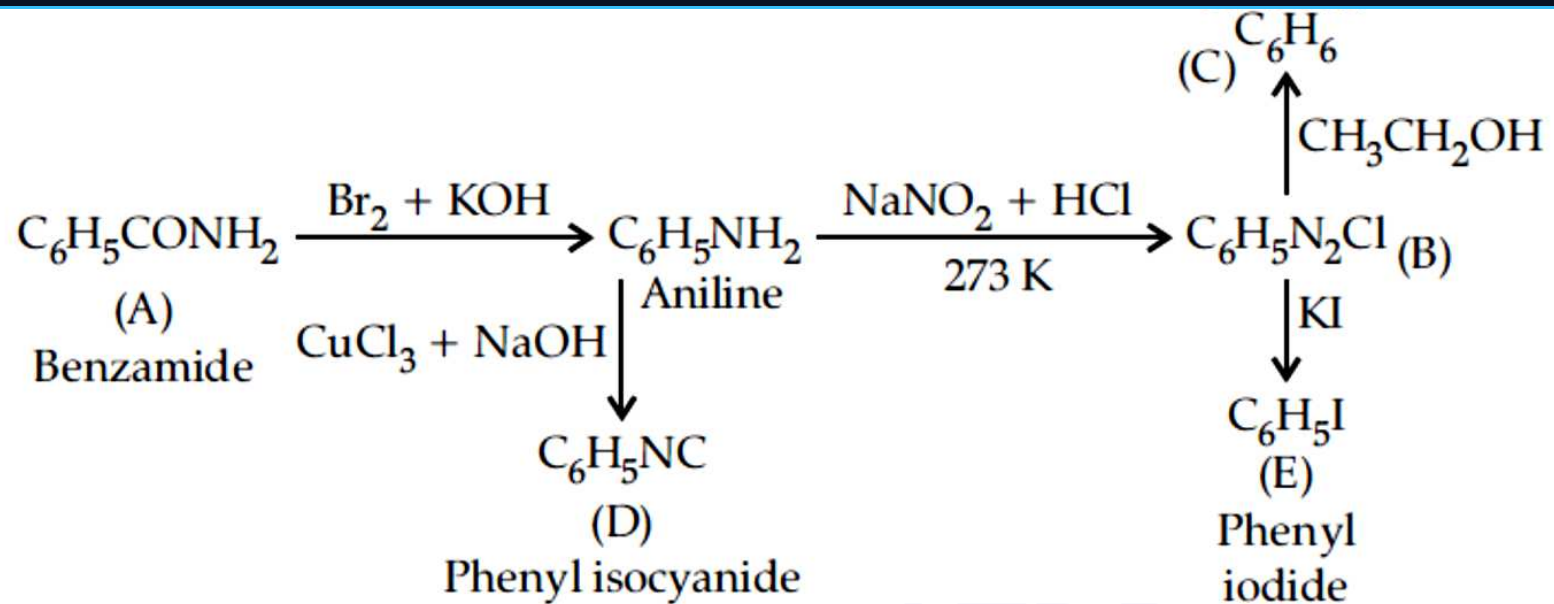
- (i) Aniline does not undergo Friedel-Crafts reaction,**
- (ii) $(\text{CH}_3)_2\text{NH}$ is more basic than $(\text{CH}_3)_3\text{N}$ in an aqueous solution,**
- (iii) Primary amines have higher boiling point than tertiary amines. [CBSE OD 2016; Delhi 2014]**

ATDB.uno

Write the structures of A, B, C, D and E in the following reactions :



ATDB.uno



ATDB.uno

Name the components of starch.

Which of the two components of starch are water soluble ? [CBSE Delhi 2014]

Write the products of hydrolysis of maltose ?

What are the products of hydrolysis of lactose ?

Write any two reactions of glucose which cannot be explained by the open chain structure of glucose molecule. [CBSE Delhi 2012]

OR

Enumerate the reactions and facts of D-glucose which cannot be explained by its open chain structure.

ATDB.uno

Define the following terms :

Glycosidic linkage

Invert sugar

Oligosaccharides.

ATDB.uno

What type of bonding help in stabilising the α -helix structure of proteins ?

What are the different types of RNA molecules which perform different functions ?

ATDB.uno

Write the main structural difference between DNA and RNA. Of the two bases, thymine and uracil, which one is present in DNA ?

ATDB.uno

Q. 2. (i) Write the name of two monosaccharides obtained on hydrolysis of lactose sugar.

Why vitamin C cannot be stored in our body ?

What is the difference between a nucleoside and nucleotide ? [CBSE Delhi 2016; DDE]

ATDB.uno

Q. 5. (i) Which one of the following is a polysaccharide :

starch, maltose, fructose, glucose

Write one difference between α -helix and β -pleated sheet structures of protein.

Write the name of the disease caused by the deficiency of vitamin B₁₂.

ATDB.uno

blindness ?

Name the base that is found in nucleotide of RNA only.

Glucose on reaction with HI gives n-hexane. What does it suggest about the structure of glucose ?

ATDB.uno

Q. 3. (i) Write the structural difference between starch and cellulose.

What type of linkage is present in Nucleic acids ?

Give one example each for fibrous protein and globular protein. [CBSE OD 2016]

ATDB.uno

Give one example each of water soluble and fat soluble vitamins.

Draw pyranose structure of glucose.

ATDB.uno

ATDB.uno



ATDB.uno